

2017 national curriculum tests

Key stage 2

Mathematics

Paper 3: reasoning



This link shows video solutions for the whole paper.

For solutions to individual questions, click on the link below the question number.

First name						
Middle name						
Last name						
Date of birth	Day		Month		Year	
School name						
DfE number						



1



Write the missing number to make this **division** correct.

$$75 \div \boxed{} = 7.5$$

1 mark

2



A group of friends earns £80 by washing cars.

They share the money **equally**.

They get £16 each.

How many friends are in the group?

1 mark



3

Chen uses these digit cards.



5

6

9

She makes a 2-digit number and a 1-digit number.

She multiplies them together.

Her answer is a **multiple of 10**

What could Chen's multiplication be?

$$\begin{array}{|c|c|} \hline & \\ \hline \end{array} \times \begin{array}{|c|} \hline \\ \hline \end{array}$$

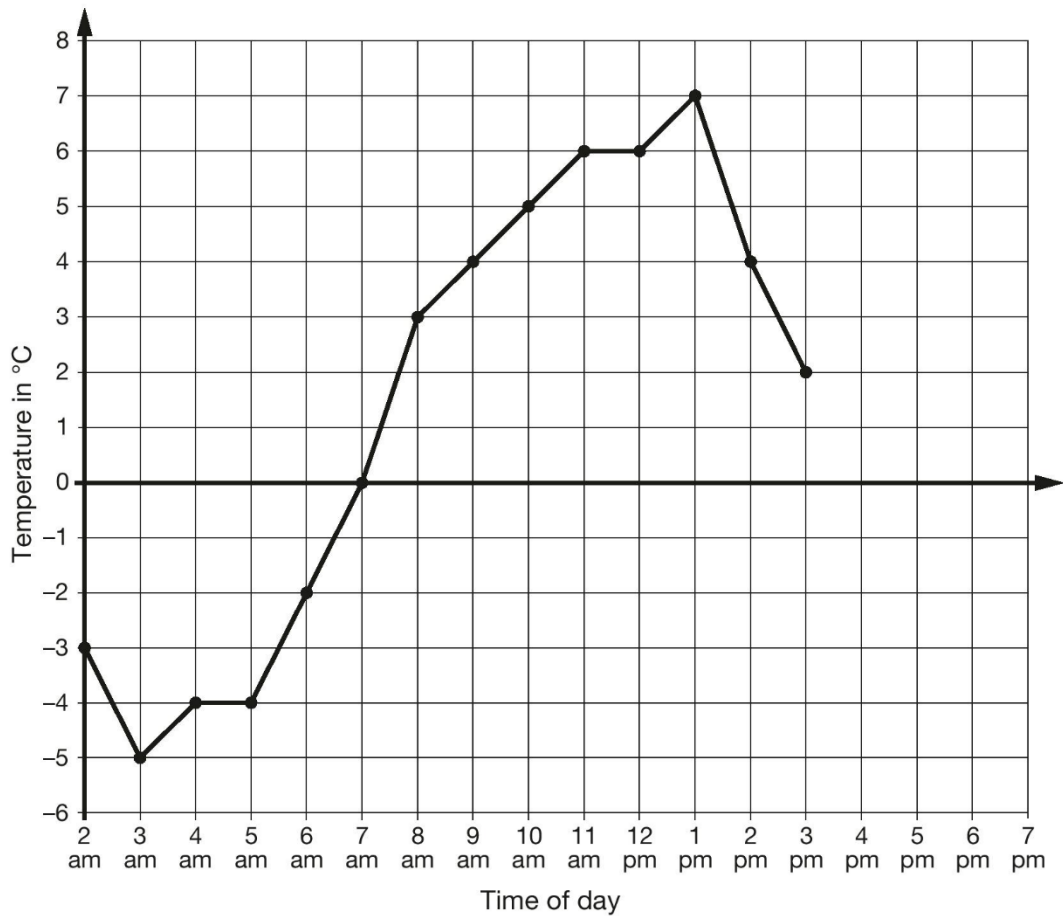
1 mark



4



This graph shows the temperature in $^{\circ}\text{C}$ from 2 am to 3 pm on a cold day.



How many degrees **warmer** was it at 3 pm than at 3 am?

 $^{\circ}\text{C}$

1 mark

At 6 pm the temperature was 4 degrees lower than at 3 pm.

What was the temperature at 6 pm?

 $^{\circ}\text{C}$

1 mark



5



The children at Farmfield School are collecting money for charity.

Their target is to collect £360

So far they have collected £57.73

How much **more** money do they need to reach their target?

£

1 mark



6



William wants to travel to Paris by train.

He needs to arrive in Paris by **5:30pm**.

Circle the **latest time** that William can leave London.

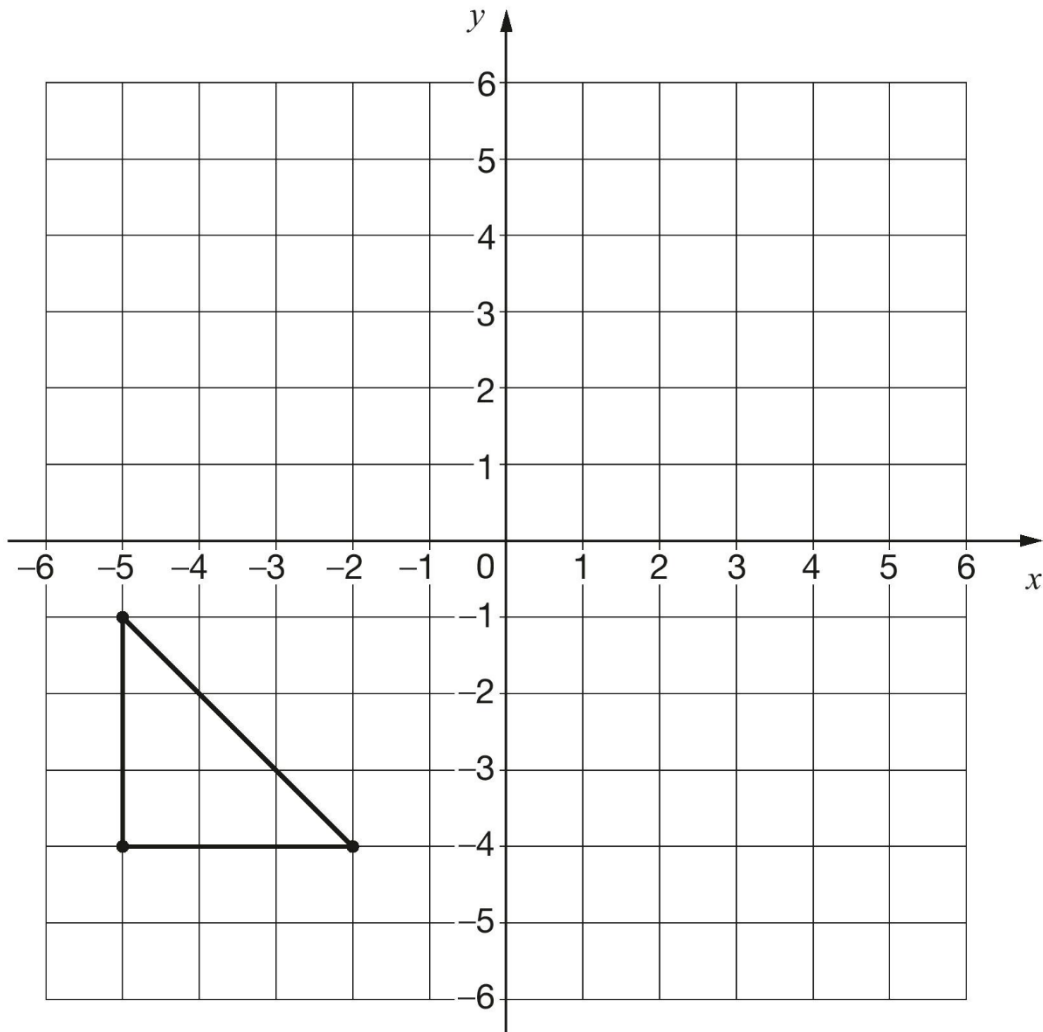
Leaves London	Arrives Paris
12:01	15:22
12:25	15:56
13:31	16:53
14:01	17:26
14:31	17:53
15:31	18:53
16:01	19:20

1 mark



7

Here is a triangle drawn on a coordinate grid.



1 mark

The triangle is translated **7 right** and **5 up**.

Draw the triangle in its new position.



8

Write three factors of 30 that are **not** factors of 15

2 marks

9

Here is the morning timetable for Chen's class this week.



Time	Mon	Tue	Wed	Thu	Fri
9:00 am–10:30 am	Maths	English	Maths	English	Maths
10:30 am–11:00 am	Break	Break	Break	Break	Break
11:00 am–12:00 pm	English	Maths	Science	Maths	English

What is the **total** number of hours for **English** on this timetable?
 hours

1 mark




10

A bottle contains 568 millilitres of milk.



Jack pours out **half a litre**.



How much milk is left?

1 mark

11

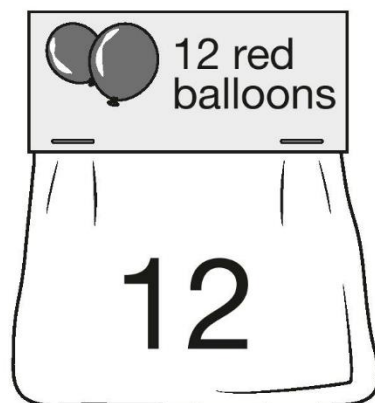
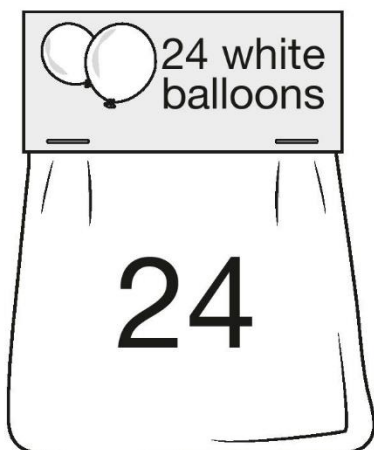
A bicycle wheel has a diameter of 64 cm.



What is the **radius** of the bicycle wheel?

1 mark





Adam buys **6** bags of white balloons.

Chen buys **3** bags of red balloons.

Adam says,

'I have four times as many balloons as Chen.'

Explain why Adam is correct.

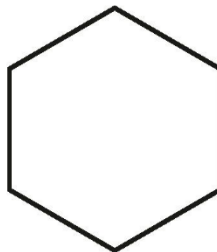
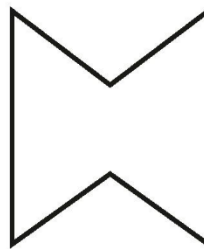
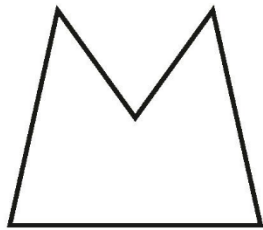
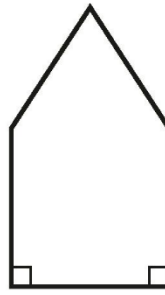
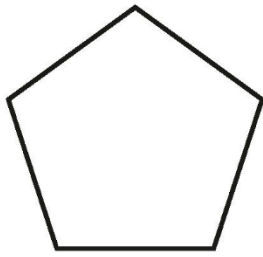
1 mark



13



Circle the **pentagon** with exactly **four acute angles**.




1 mark





One mango costs £1.35



How much does **one** pineapple cost?

Show
your
method

£

2 marks



15

Look at the letters below.



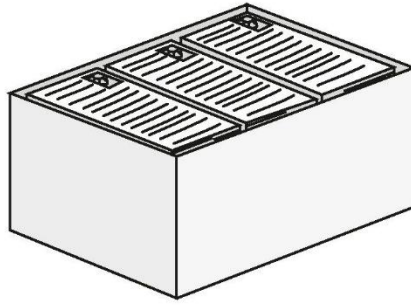
Circle the letter below that has both parallel **and** perpendicular lines.

A C E L Z

1 mark



16



There are 2,400 leaflets in a box.

William and Ally take 450 leaflets each.

Adam and Chen share the rest of the leaflets equally.

How many leaflets does Adam get?

Show
your
method

2 marks



17

In each box, circle the number that is **greater**.



$1\frac{1}{2}$

1.2

$1\frac{1}{4}$

1.3

$1\frac{5}{100}$

1.4

$1\frac{3}{5}$

1.5

2 marks



18



A **square** number and a **prime** number have a total of 22

What are the two numbers?

$$\boxed{} + \boxed{} = 22$$

square number prime number

1 mark

19



Dev thinks of a **whole** number.

He multiplies it by 4

He rounds his answer to the nearest 10

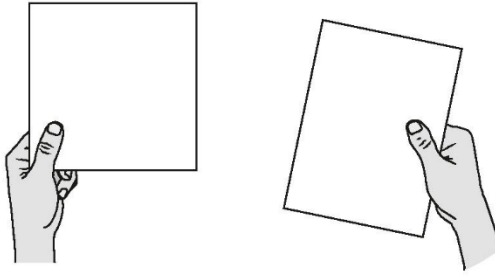
The result is 50

Write **all** the possible numbers that Dev could have started with.

2 marks



20

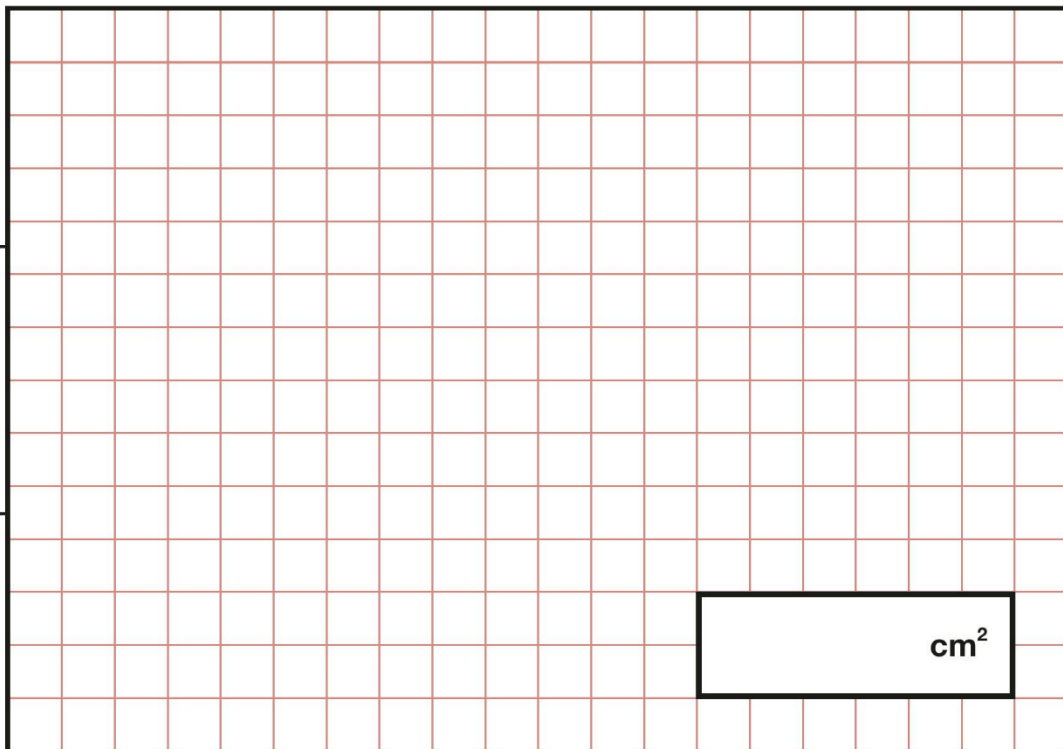


A square tile measures 20 cm by 20 cm.

A rectangular tile is 3 cm **longer** and 2 cm **narrower** than the square tile.

What is the **difference in area** between the two tiles?

Show
your
method



3 marks



21

The numbers in this sequence increase by the same amount each time.



Write the missing numbers.

1

 $1\frac{5}{8}$ $2\frac{1}{4}$

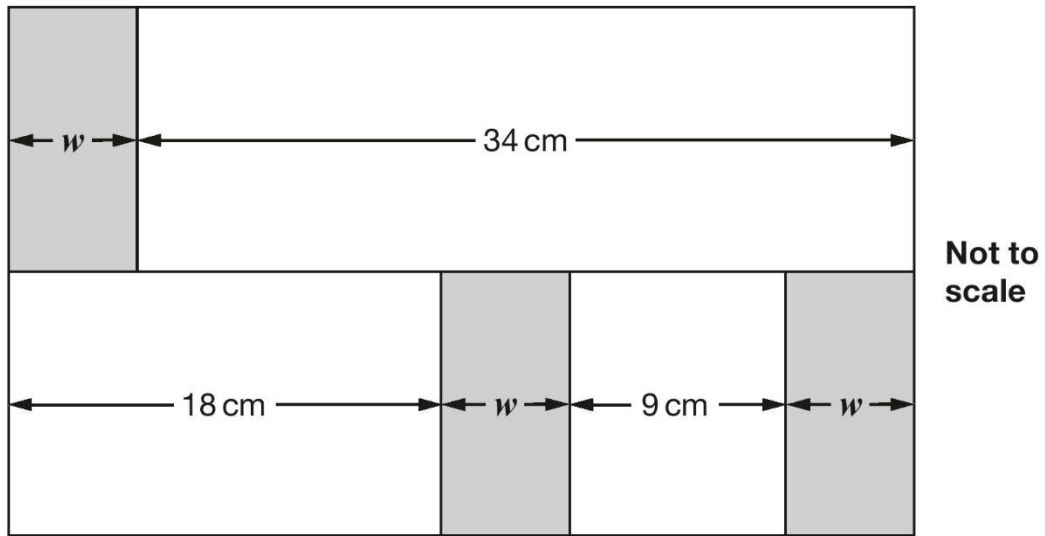
1 mark

1 mark

22

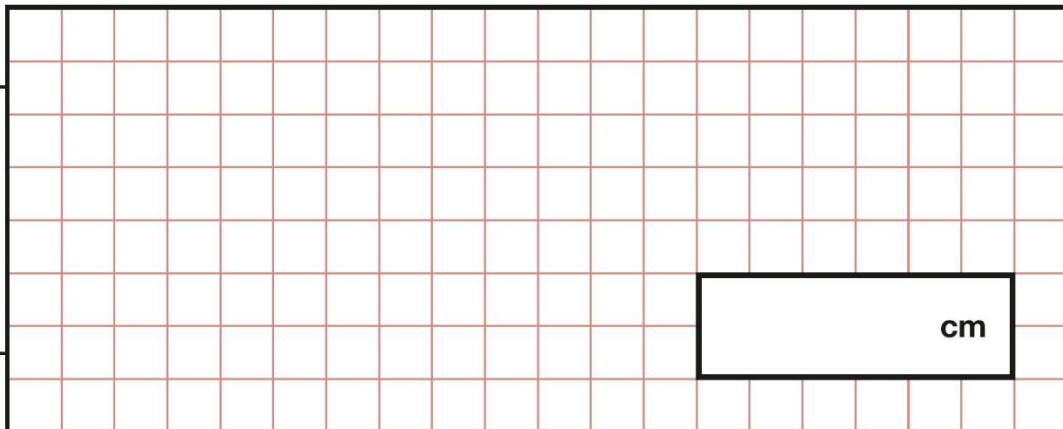


In this diagram, the shaded rectangles are all of equal width (w).



Calculate the width (w) of one shaded rectangle.

Show
your
method



2 marks



23



Here is a pattern of number pairs.

a	b
1	9
2	19
3	29
4	39

Complete the **rule** for the number pattern.

$$b = \boxed{} \times a - \boxed{}$$

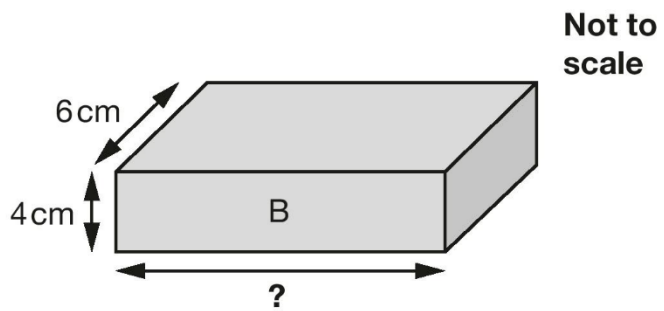
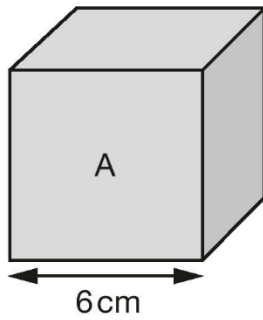
1 mark



24

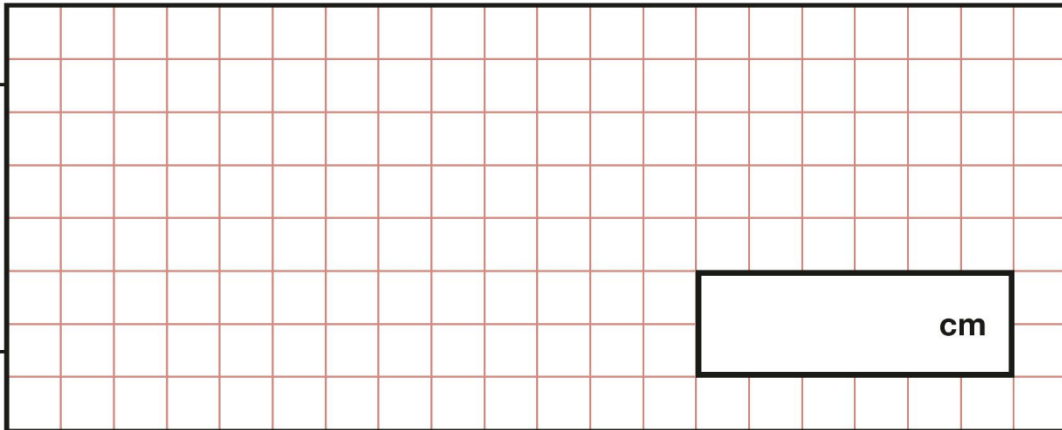


Cube A and cuboid B have the same volume.



Calculate the missing length on cuboid B.

Show
your
method



2 marks

